

Jawahar Navodaya Vidyalaya Exam (JNVST) Class 6 (Phase - 2)



Exam Date - 20 January, 2024
Question Paper with Answer Key

Name of the Candidate :

PRINCE

Signature of the Candidate :

Prince

(English Medium)

Time : 2 Hours

Maximum Marks : 100

GENERAL INSTRUCTIONS FOR CANDIDATES

1. You are given a Test Booklet of 16 pages as well as an OMR (Optical Mark Recognition) Answer Sheet. The Test Booklet contains 80 questions serially numbered from 1 to 80. Count the pages of the Test Booklet and be sure that they are in proper order. Ensure that the Serial No. and the Code of the Test Booklet and the OMR Answer Sheet are same. In case of mismatch/defect/discrepancy in the Test Booklet and the OMR Answer Sheet, report to your Invigilator and get the Test Booklet and the OMR Answer Sheet replaced.
2. Answers are to be marked only in the OMR Answer Sheet as per the example given below. Candidates are required to indicate their answers at an appropriate place on the OMR Answer Sheet. Darken only one circle for each question as per instructions given on Side-1 of the OMR Answer Sheet.
3. For each question, there are four probable answers, out of which only one is correct. The candidate is required to select the correct answer and darken the corresponding circle of the chosen answer. For example, if your answer for Question No. 37 is (C), darken the circle © as given below :

Q. No.	RESPONSE
37.	(A) (B) (C) (D)

4. Only Blue/Black Ballpoint Pen is to be used to write on the OMR Answer Sheet. Candidates should bring their own Ballpoint Pen. Use of pencil is strictly prohibited.
5. The test will be of two hours duration from 11:30 a.m. to 01:30 p.m. and will have three Sections with only objective-type questions.
6. Additional time of 40 minutes will be allowed for 'Divyang Students' (differently-abled students).
7. A single Test Booklet comprising all the three Sections will be given to each candidate.
8. There are 80 questions in all for 100 marks as per details below. 15 minutes additional time is allowed for reading the instructions from 11:15 a.m. to 11:30 a.m. :

Type of Tests	Sections	Number of Questions	Marks
Mental Ability Test	Section—I	From 1 to 40 = 40 Questions	50
Arithmetic Test	Section—II	From 41 to 60 = 20 Questions	25
Language Test	Section—III	From 61 to 80 = 20 Questions	25
Total		80	100

9. All questions are to be attempted. Every question carries equal mark.
10. You must attempt questions of each Section because you have to qualify in each Section separately.
11. Section—I has ten Parts. Separate directions are given for each Part.
12. Overwriting, striking, cutting, applying white/correction fluid and erasing on the OMR Answer

SEAL



Navodaya School
News & Study Material



Join Navodaya Exam
2024 Result

Whatsapp Group

Click Here to Join

Helpline

Whatsapp No.

8696503800

Navodaya Study Group
(Result 2024)



Navodaya School
News & Study Material

Navodaya Study Group
(Result 2024)



Join Navodaya Exam
2024 Result
Whatsapp Group

Click Here to Join

Helpline

Whatsapp No.
8696503800



Navodaya School
News & Study Material

Navodaya Study Group
(Result 2024)



Join Navodaya Exam
2024 Result
Whatsapp Group

Click Here to Join

Helpline

Whatsapp No.
8696503800



Navodaya School
News & Study Material

Navodaya Study Group
(Result 2024)



Join Navodaya Exam
2024 Result
Whatsapp Group

Click Here to Join

Helpline

Whatsapp No.
8696503800

! Important for Coaching/School !

(ePariksha India) Publication की Navodaya Exam के लिए
Guide Book और Model Paper आप अपनी Coaching की
Brand Name और


Logo के साथ
Print करवा सकते है.



Navodaya Exam (JNVST) Class 6

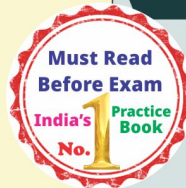

10 Model Paper
with
10 OMR Sheet

परीक्षा से पहले 10 परीक्षा



Navodaya Exam (JNVST) Class 6

Guide Book
with
Practice Questions



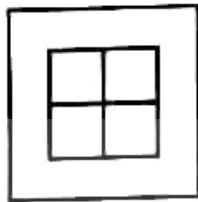
Call Us
for Sample
PDF

Helpline
8696503800


SECTION-I
MENTAL ABILITY TEST
PART-1

Directions : In Question Nos. 1 to 4, four figures (A), (B), (C) and (D) have been given in each question. Of these four figures, three figures are similar in some way and one figure is different. Select the figure which is different. Darken the circle for the answer in the OMR Answer Sheet against the number corresponding to the question.

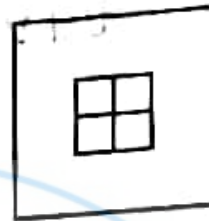
1.



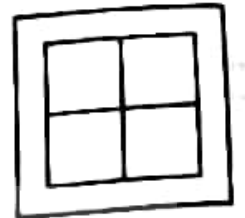
(A)



(B)

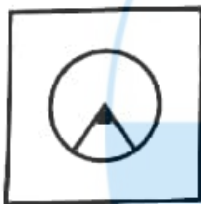


(C)



(D)

2.



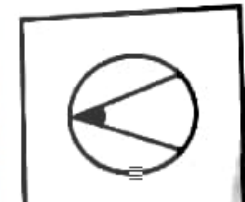
(A)



(B)



(C)



(D)

3.



(A)



(B)

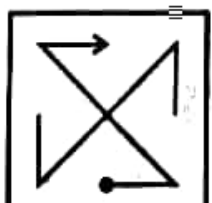


(C)

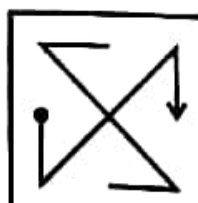


(D)

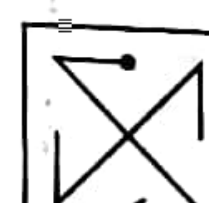
4.



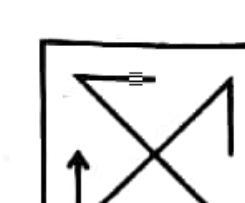
(A)



(B)



(C)





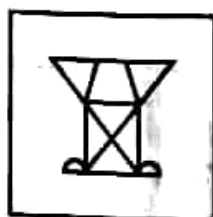
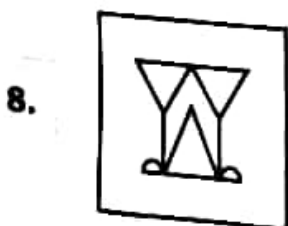
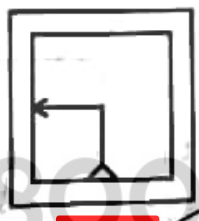
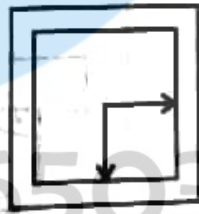
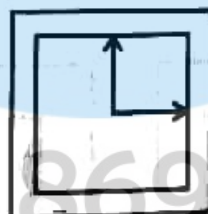

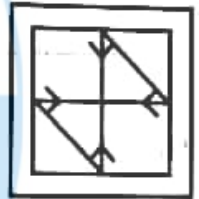
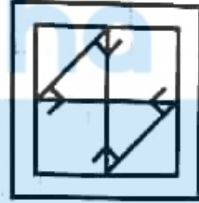
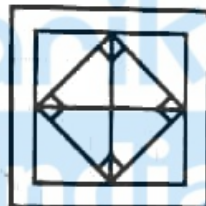
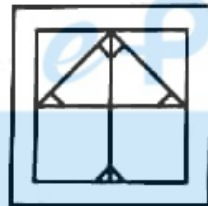
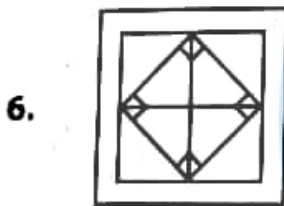


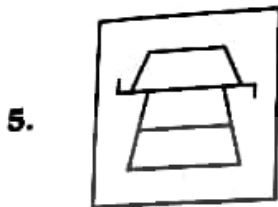
(D)

PART-2

Directions : In Question Nos. 5 to 8, a question figure is given on the left side and four answer figures marked (A), (B), (C) and (D) are given on the right side. Select the answer figure which is exactly the same as the question figure and darken the circle in the OMR Answer Sheet against the number corresponding to the question.

Question Figure

Answer Figures

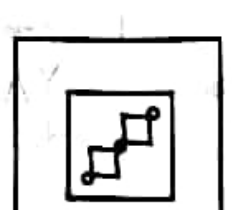
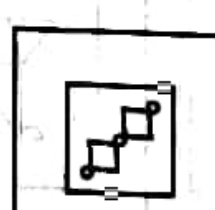
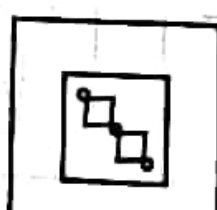
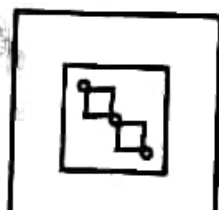
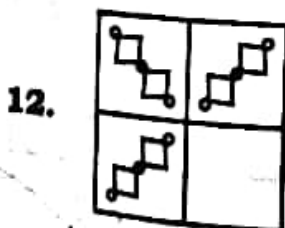
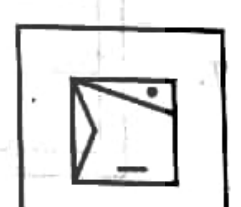
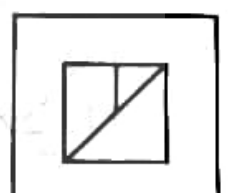
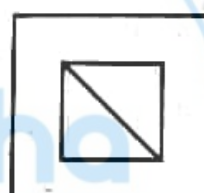
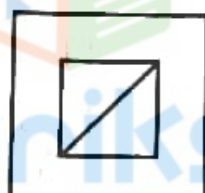
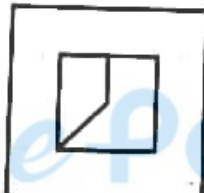
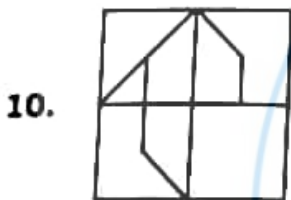
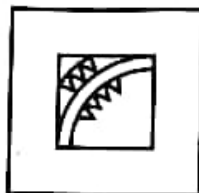

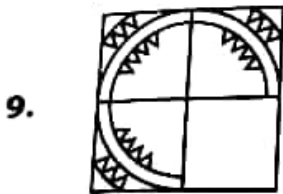


PART-3

Directions : In Question Nos. 9 to 12, there is a question figure on the left side, a part of which is missing. Observe the answer figures (A), (B), (C) and (D) on the right side and find out the answer figure which, **without changing the direction**, fits in the missing part of the question figure in order to complete the pattern in the question figure. Indicate your answer by darkening the circle in the OMR Answer Sheet against the number corresponding to the question.

Question Figure

Answer Figures





PART-4

Directions : In Question Nos. 13 to 16, there are three question figures on the left side and the space for the fourth figure is left blank. The question figures are in a series. Find out one figure from among the answer figures given on the right side which occupies the blank space for the fourth figure on the left side and completes the series. Indicate your answer by darkening the circle in the OMR Answer Sheet against the number corresponding to the question.


Question Figures

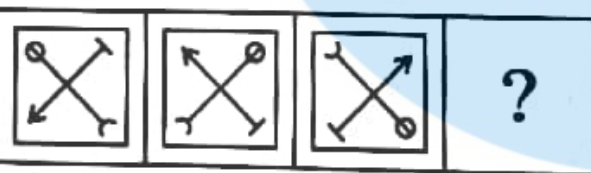
Answer Figures


13. 

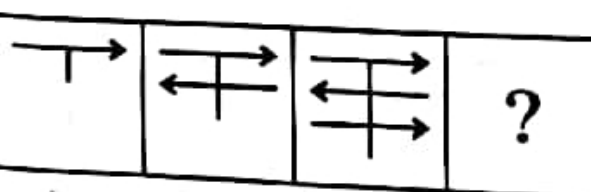

 (A) (B) (C) (D)

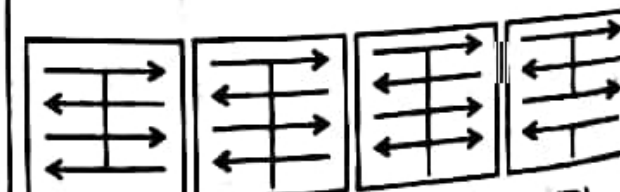
14. 


 (A) (B) (C) (D)

15. 


 (A) (B) (C) (D)


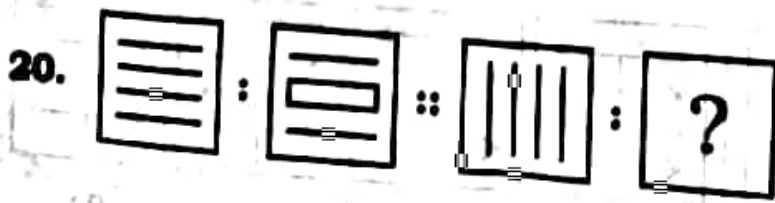
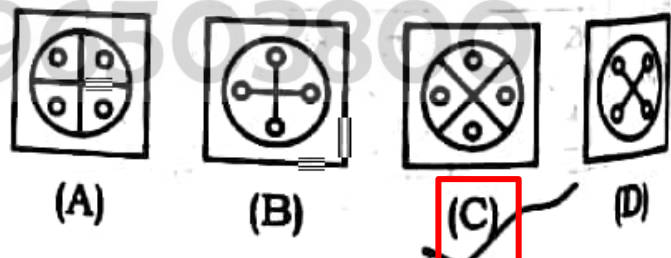
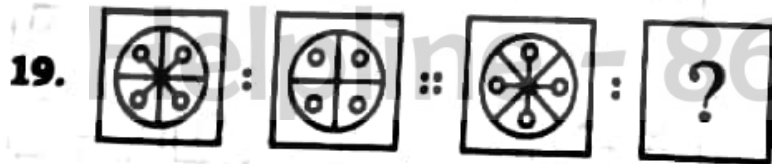
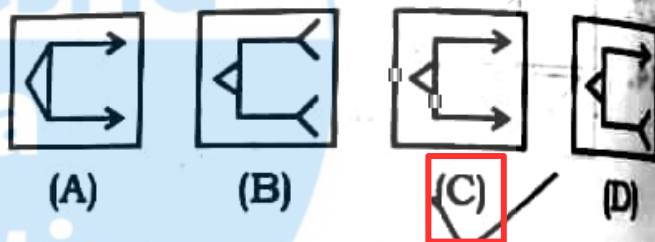
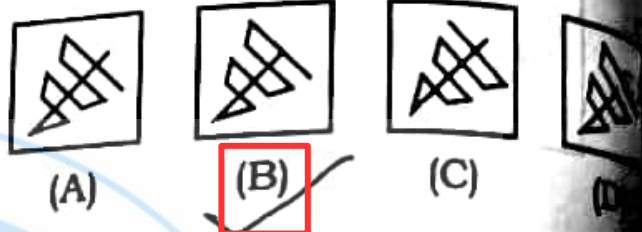
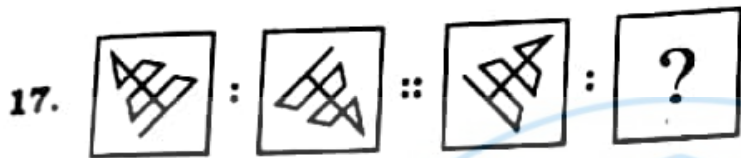
16. 


 (A) (B) (C) (D)

Directions : In Question Nos. 17 to 20, there are two sets of two question figures each. The second set has an interrogation mark (?). There exists a relationship between the first two question figures. Similar relationship should exist between the third and the fourth question figures. Select one of the answer figures which represent the mark of interrogation. Darken the circle in the OMR Answer Sheet against number corresponding to the question.

Question Figures

Answer Figures

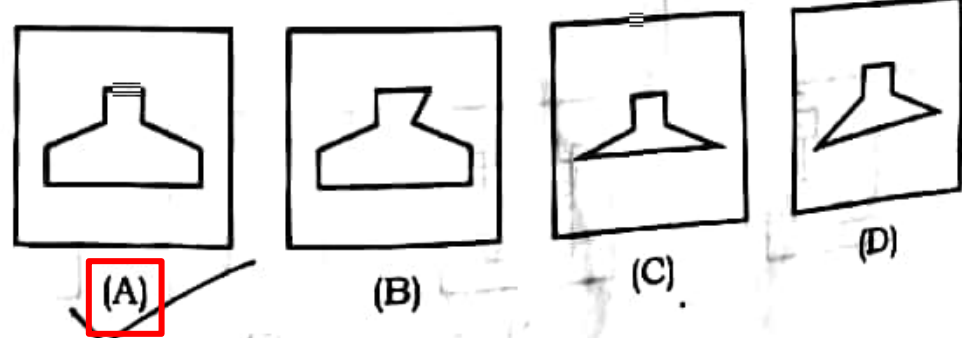
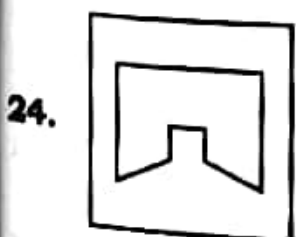
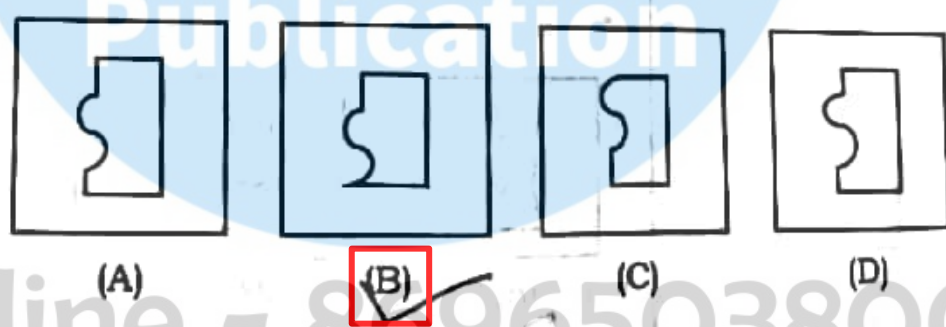
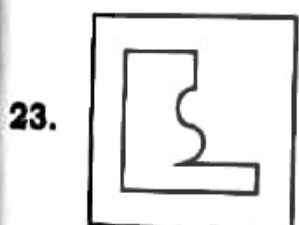
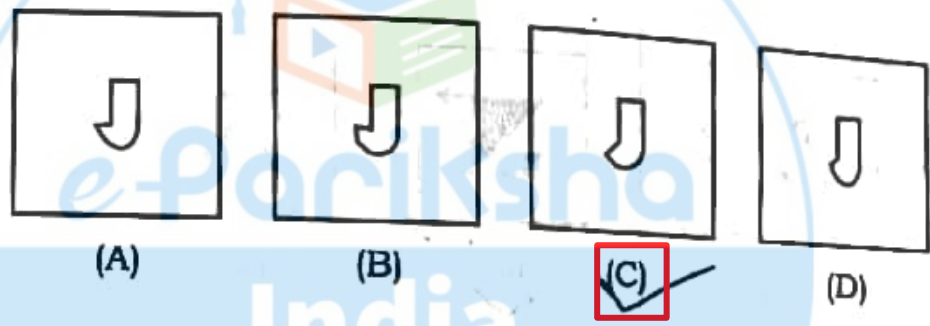
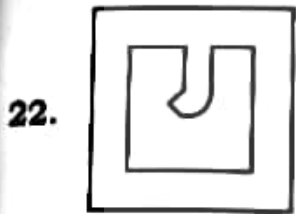
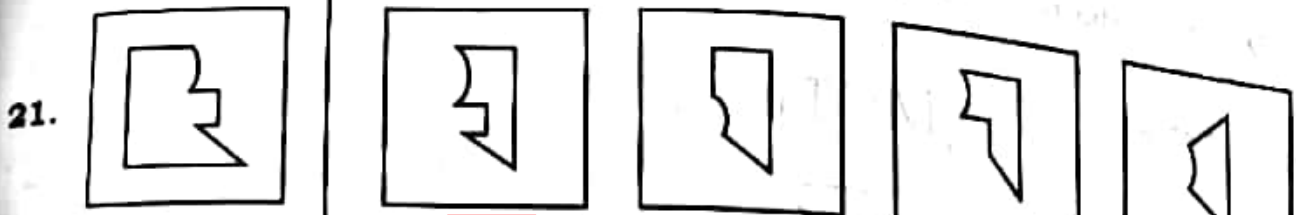


PART-6

Directions : In Question Nos. 21 to 24, one part of a geometrical figure (Triangle, Square, Circle) is on the left side as question figure and the other one is among the four answer figures (A), (B), (C) and (D) on the right side. Find the figure on the right side that completes the geometrical figure and darken the circle in the OMR Answer Sheet against the number corresponding to the question.

Question Figure

Answer Figures



India e-Pariksha Publication Helpline - 8096503800

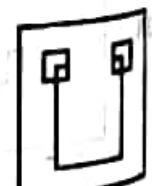
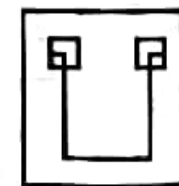
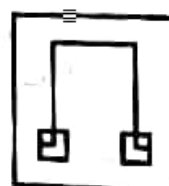
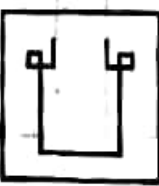
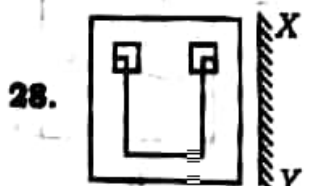
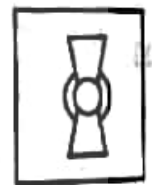

PART-7

Directions : In Question Nos. 25 to 28, there is a question figure on the left side and four answer figures marked (A), (B), (C) and (D) are given on the right side. Select the answer figure which is exactly the mirror image of the question figure when the mirror is held at XY. Indicate your answer by darkening the circle in the OMR Answer Sheet against the number corresponding to the question.

Question Figure



Answer Figures



Helpline - 8696503800

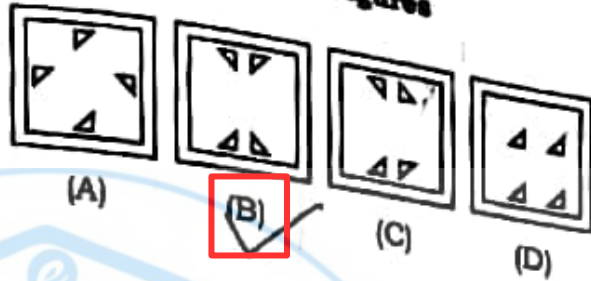
PART-8

Directions : In Question Nos. 29 to 32, a piece of paper is folded and punched as shown in the question figures on the left side, and four answer figures marked (A), (B), (C) and (D) are given on the right side. Select the answer figure which indicates how the paper will appear when opened (unfolded). Indicate your answer by darkening the circle in the OMR Answer Sheet against the number corresponding to the question.

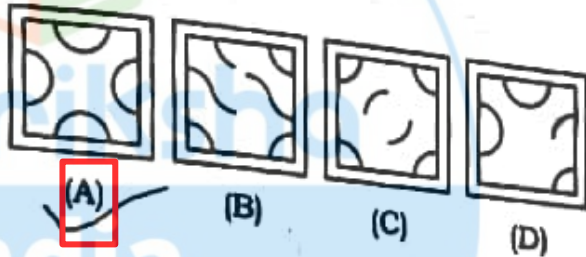
Question Figures

Answer Figures

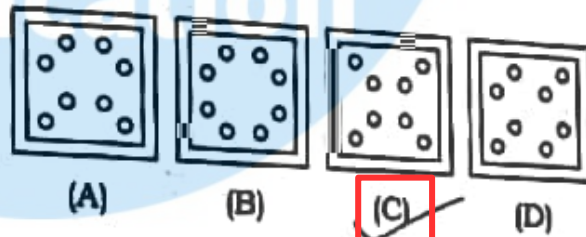
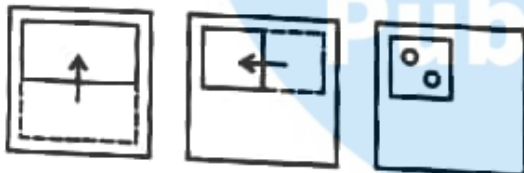
29.



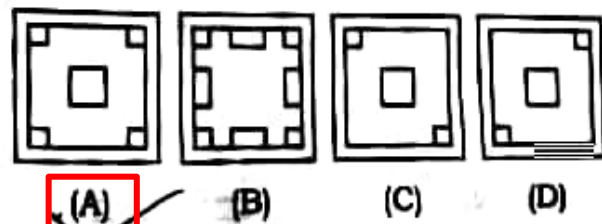
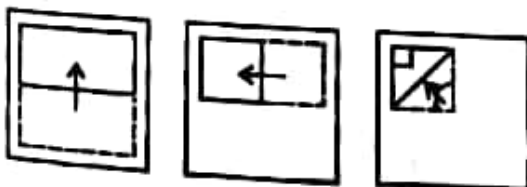
30.



31.



32.



Helpline - 8696503800



Navodaya School
News & Study Material

Navodaya Study Group
(Result 2024)



Join Navodaya Exam
2024 Result
Whatsapp Group

Click Here to Join


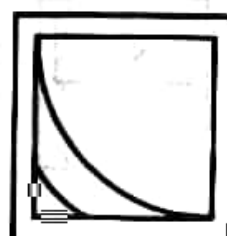
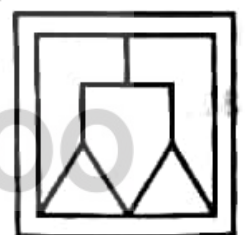
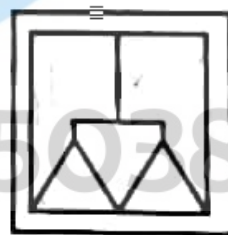
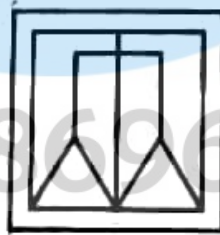
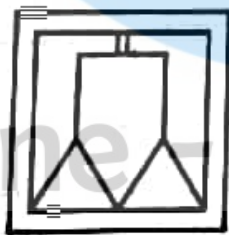

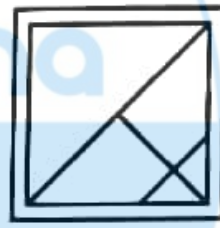

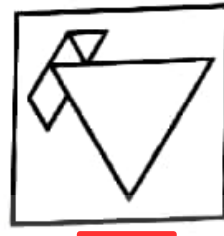
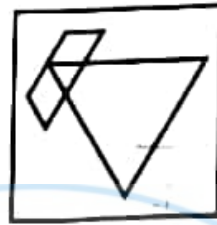
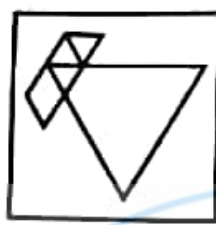
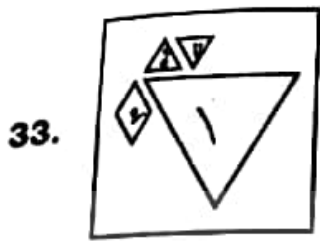
Helpline
Whatsapp No.
8696503800

PART-9

Directions : In Question Nos. 33 to 36, a question figure is given on the left side and four answer figures marked (A), (B), (C) and (D) are given on the right side. Select the answer figure which can be formed from the cut-out pieces given in the question figure. Darken the circle in the OMR Answer Sheet against the number corresponding to the question.

Question Figure

Answer Figures



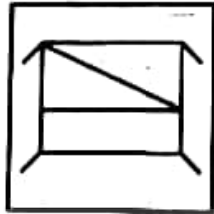
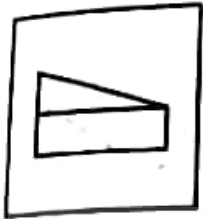
PART-10

Directions : In Question Nos. 37 to 40, a question figure is given on the left side and four answer figures marked (A), (B), (C) and (D) are given on the right side. Select the answer figure in which the question figure is hidden/embedded. Darken the circle in the OMR Answer Sheet against the number corresponding to the question.


Question Figure

Answer Figures

37.



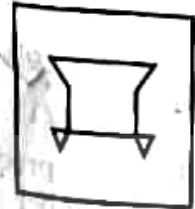
(A)



(B)

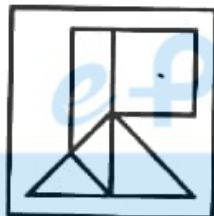


(C)




(D)

38.



(A)



(B)


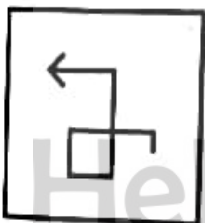


(C)




(D)

39.



(A)



(B)

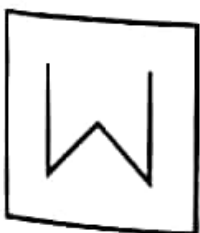


(C)




(D)


40.



(A)



(B)



(C)



(D)

SECTION—II
ARITHMETIC TEST

Directions : For every question, four probable answers as (A), (B), (C) and (D) are given. Only **one** out of these is **correct**. Choose the correct answer and darken the circle in the OMR Answer Sheet against the number corresponding to the question.

41. If we write all the numbers from 1 to 100, the number of times the digit 9 occurs is :
 (A) 19 (B) 20
 (C) 21 (D) 23
42. The product of the greatest 3-digit number and the least number of 3 digits, which can be formed using digits 9, 6 and 0, is :
 (A) 66240 (B) 999000
 (C) 584640 (D) 869760
43. A fraction remains the same or equivalent if :
 (A) the same number is added to the numerator and the denominator
 (B) the same number is subtracted from the numerator and the denominator
 (C) the numerator and the denominator are multiplied by the same number other than zero
 (D) it is multiplied by its reciprocal
44. If $4392 \div 3.66 = 1200$, then $439.2 \div 36.6 =$
 (A) 12 (B) 0.12
 (C) 1.02 (D) 1.2
45. The perimeter of a square is equal to the perimeter of a rectangle of length 17 m and breadth 11 m. The area of square (in m^2) is :
 (A) 196 (B) 14
 (C) 187 (D) 121
46. The number of packets of sweets weighing $\frac{2}{3}$ kg each, that can be made from 30 kg of sweets, is :
 (A) 20 (B) 30
 (C) 40 (D) 45
47. The area of a rectangular plot is 616 sq. m and its breadth is 22 m. The cost of fencing the plot at the rate of ₹ 7.50 per metre is :
 (A) ₹ 1,500 (B) ₹ 375
 (C) ₹ 4,620 (D) ₹ 750
48. If $\frac{a}{b}$ is a fraction, where $a = b - 3$ and $\frac{a+10}{b} - \frac{a}{b} = \frac{10}{7}$, then $\frac{a}{b}$ is :
 (A) $\frac{8}{11}$ (B) $\frac{2}{5}$
 (C) $\frac{4}{7}$ (D) $\frac{5}{8}$
49. Conversion of $31\frac{7}{16}$ into decimal is :
 (A) 314.375 (B) 3.14375
 (C) 31.4375 (D) 31.475
50. If each side of a square is decreased to one-third of itself, then the area of the square will be decreased to :
 (A) one-seventh
 (B) one-third
 (C) one-eighth
 (D) one-ninth

SPACE FOR ROUGH WORK

51. The profit earned in selling an article for ₹ 2,540 is equal to the loss incurred in selling at ₹ 1,850. The cost price of the article is :
- (A) ₹ 2,095 (B) ₹ 2,195 ✓
(C) ₹ 2,010 (D) ₹ 2,020

52. A machine can print 12 pages in a minute. How long will the machine take to print 5760 pages?
- (A) 7 hours (B) 8 hours ✓
(C) $8\frac{1}{2}$ hours (D) 9 hours

53. The cost price of a book is ₹ 100. A shopkeeper sells 3 such books for ₹ 275. What is his profit or loss?
- (A) Profit of ₹ 175 ✓
(B) Profit of ₹ 25
(C) Loss of ₹ 175
(D) Loss of ₹ 25

54. The simplification of

$$5\frac{3}{8} \times 8\frac{1}{8} - 3\frac{1}{8} \times 5\frac{5}{8}$$

gives approximately :

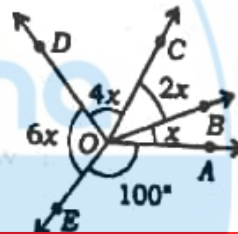
- (A) 25 (B) 26 ✓
(C) 27 (D) 30
55. 30009 is same as :
- (A) 30 ten thousands and 9 tens
(B) 30 thousands and 9 hundreds ✓
(C) 3 ten thousands and 9 ones
(D) 3 ten thousands and 9 tens

56. Sumit weighs 107 kg and Sanjay weighs 82 kg. The difference of their weight if the weight of each is rounded off to the nearest tens is :
- (A) 30 kg (B) 100 kg
(C) 40 kg (D) 20 kg ✓

57. If the sum of two angles is an obtuse angle, then which of the following is not possible?
- (A) One right angle and one acute angle ✓
(B) One obtuse angle and one acute angle
(C) Two acute angles
(D) Two right angles


58. The sum of the digits of a number is subtracted from the number. The resulting number is always divisible by :
- (A) 2 (B) 7
(C) 5 (D) 9 ✓

59. In the figure, the measures of $\angle AOB$, $\angle BOC$, $\angle COD$, and $\angle DOE$ respectively are :



- (A) $20^\circ, 40^\circ, 80^\circ, 120^\circ$ ✓
(B) $30^\circ, 30^\circ, 70^\circ, 130^\circ$
(C) $40^\circ, 30^\circ, 120^\circ, 70^\circ$
(D) $50^\circ, 20^\circ, 80^\circ, 110^\circ$

60. The given bar chart shows the number of matches played by cricket teams of different countries in a year. How many more matches were played by Australia than Pakistan?



- (A) 8 ✓ (B) 2
(C) 4 (D) 6

SPACE FOR ROUGH WORK

32
24
8

SECTION—III
LANGUAGE TEST

Directions : There are four passages in this Section. Each passage is followed by five questions. Read each passage carefully and answer the questions that follow. For each question, four probable answers as (A), (B), (C) and (D) are given. Only one out of these is correct. Choose the correct answer and darken the circle in the OMR Answer Sheet against the number corresponding to the question.

PASSAGE—1

Expressing gratitude is a great virtue which every human being should possess. It is a feeling whereby we express our thanks to someone. We can express our gratitude in various forms. We can be grateful in our thoughts, words, and actions. When we say 'Thank you', it means we are grateful. We should be grateful to everyone who is helpful to us. We should be grateful to God because 'He' has blessed us with many good things. We should say thanks to Him from the bottom of our heart.

61. 'Thank you' means that we are

- (A) superior
- (B) sad
- (C) miserable
- (D) grateful

62. What is a great virtue?

- (A) Expressing cruelty
- (B) Expressing gratitude
- (C) Expressing sorrow
- (D) Expressing misery

63. One can be grateful in one's also.

- (A) virtues
- (B) duties
- (C) thoughts
- (D) earnings

64. 'Helpful' is a/an

- (A) noun
- (B) pronoun
- (C) verb
- (D) adjective

65. 'Virtue' means

- (A) quality
- (B) heroism
- (C) evil
- (D) peace

PASSAGE—2

You might have heard about this great environmentalist and social worker, Sunderlal Bahuguna. He was born in a small village of Uttarakhand. His village was situated in the upper hills surrounded by green forests. The forests were covered with precious trees. Many sports goods manufacturing companies started cutting trees for making goods. It resulted in devastating floods in the adjoining areas. People faced many problems due to floods. They understood the importance of forests in their lives.

66. Sunderlal Bahuguna was a great

- (A) environmentalist
- (B) scientist
- (C) teacher
- (D) doctor

67. His village was surrounded by

- (A) dark forests
- (B) brown forests
- (C) green forests
- (D) dry forests

68. Cutting forests resulted in

- (A) devastating floods
- (B) floodgates
- (C) droughts
- (D) floodlights

69. 'Sunderlal Bahuguna' is a/an noun.

- (A) common
- (B) collective
- (C) abstract
- (D) proper

70. 'Precious' is the synonym of

- (A) hateful
- (B) loathsome
- (C) priceless
- (D) useless

PASSAGE—3

Scientists and doctors warn us about the dangerous effects of TV on various systems and organs of our body. Everyone on an average watches TV for three to four hours daily, which weakens the eyesight. Children are the most affected because they watch TV from a close range, which is more harmful. This has also resulted in a general complaint of headache.

Watching TV for long hours is harmful for our physical health and mental growth. The high-pitched sound of dance, music and fights presented in various programmes may result in deafness. Watching TV continuously in one posture also causes joint pain, backache and muscle pain. Eating while watching TV makes our digestive system sluggish and causes obesity. Scenes of horror and violence cause psychological problems among the youth.

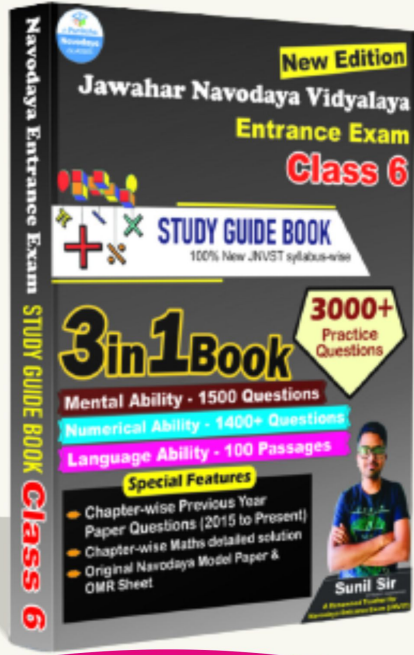
71. Watching TV continuously for long hours does **not** affect our
(A) mental health (B) height
(C) digestion (D) weight
72. "Scenes of horror and violence cause psychological problems among the youth." The 'psychological problems' refer to the problems connected with
(A) mind
(B) heart
(C) digestive system
(D) hearing ability
73. Watching TV mostly affects the eyesight of children because
(A) they have sluggish digestive system
(B) they sit in wrong postures while watching TV
(C) they watch TV from close
(D) they eat while watching TV
74. The synonym of the word 'sluggish' is
(A) energetic (B) busy
(C) slow (D) brisk
75. The antonym of the word 'harmful' as used in the passage is
(A) injurious (B) hopeless
(C) useful (D) dangerous

PASSAGE—4

Humility is a great virtue. It means being humble, meek and modest. It is the opposite of being proud. It is the quality of keeping oneself under control. Such a person is not stubborn. He is open to the advice of others and learns from their experience. He is the master of himself. He does not become annoyed easily. A humble person admits his mistakes and shortcomings with a smile. He is thoughtful because he is not self-centred.

76. Humility is a great
(A) quality
(B) evil
(C) sin
(D) fault
77. Humility means
(A) being arrogant
(B) being humble
(C) being cruel
(D) being unkind
78. A humble person learns from
(A) others' experience
(B) his own experience
(C) teachers' experience
(D) parents' experience
79. 'Proud' is the synonym of
(A) humble
(B) meek
(C) modest
(D) arrogant
80. 'Stubborn' is the antonym of
(A) adamant
(B) hard
(C) agreeable
(D) wilful

नवोदय परीक्षा कक्षा 6 में 100% Selection दिलाने वाली रामबाण पुस्तक



जवाहर नवोदय विद्यालय प्रवेश परीक्षा

कक्षा 6

स्टडी गाइड

3000 +
Practice
Questions

विशेषताएँ :-

- Mental Ability (मानसिक योग्यता) - 1500 Questions
- Numerical Ability (अंकगणित परीक्षण) - 1400 Questions
- Language Ability (भाषा परीक्षण) - 100 Passages
- Complete Chapter - wise Notes

आज ही अपने घर मंगवाएं,
और अपनी नवोदय की
तैयारी को बेहतर बनायें

Call Now - 8696503800

! Important for Coaching/School !


(ePariksha India) Publication की Navodaya Exam के लिए
Guide Book और Model Paper आप अपनी Coaching की

Brand Name और
Logo के साथ
Print करवा सकते है.

Navodaya Exam (JNVST) Class 6

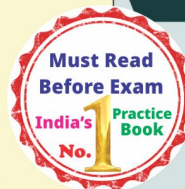

10 Model Paper
with
10 OMR Sheet

परीक्षा से पहले 10 परीक्षा



Navodaya Exam (JNVST) Class 6

Guide Book
with
Practice Questions



Call Us
for Sample
PDF
Helpline
8696503800



Navodaya School
News & Study Material

Navodaya Study Group
(Result 2024)



Join Navodaya Exam
2024 Result
Whatsapp Group

Click Here to Join

Helpline

Whatsapp No.
8696503800



Navodaya School
News & Study Material

Navodaya Study Group
(Result 2024)



Join Navodaya Exam
2024 Result
Whatsapp Group

Click Here to Join

Helpline

Whatsapp No.
8696503800



Navodaya School
News & Study Material

Navodaya Study Group
(Result 2024)



Join Navodaya Exam
2024 Result
Whatsapp Group

Click Here to Join

Helpline

Whatsapp No.
8696503800

! Important for Coaching/School !

(ePariksha India) Publication की Navodaya Exam के लिए
Guide Book और Model Paper आप अपनी Coaching की
Brand Name और


Logo के साथ
Print करवा सकते है.



Navodaya Exam (JNVST) Class 6

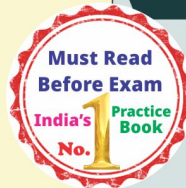

10 Model Paper
with
10 OMR Sheet

परीक्षा से पहले 10 परीक्षा



Navodaya Exam (JNVST) Class 6

Guide Book
with
Practice Questions



Call Us
for Sample
PDF

Helpline
8696503800