



Jawahar Navodaya Entrance Exam 2023

Solved Paper

Class - 6



Helpline

8696503800

JNVST - 2023

English Medium

Class - 6

Answer Key

Exam Held on 29th April, 2023

Download
pdf

Roll Number

TEST BOOKLET

Test Booklet No.

3833411



NJ623

ENGLISH

Test Booklet Code :

G

Name of the Candidate :

~~XXXXXXXXXX~~

Signature of the Candidate :

~~XXXXXXXXXX~~

Time : 2 Hours

Maximum Marks : 100

GENERAL INSTRUCTIONS FOR CANDIDATES

- You are given a Test Booklet of 16 pages as well as an OMR (Optical Mark Recognition) Answer Sheet. The Test Booklet contains 80 questions serially numbered from 1 to 80. Count the pages of the Test Booklet and be sure that they are in proper order. Ensure that the Serial No. and the Code of the Test Booklet and the OMR Answer Sheet are same. In case of mismatch/defect/discrepancy in the Test Booklet and the OMR Answer Sheet, report to your Invigilator and get the Test Booklet and the OMR Answer Sheet replaced.
- Answers are to be marked only in the OMR Answer Sheet as per the example given below. Candidates are required to indicate their answers at an appropriate place on the OMR Answer Sheet. Darken only one circle for each question as per instructions given on Side-1 of the OMR Answer Sheet.
- For each question, there are four probable answers, out of which only one is correct. The candidate is required to select the correct answer and darken the corresponding circle of the chosen answer. For example, if your answer for Question No. 37 is (C), darken the circle (C) as given below :

| Q. No. | RESPONSE | | | |
|--------|----------|-----|-----|-----|
| 37. | (A) | (B) | (C) | (D) |

- Only Blue/Black Ballpoint Pen is to be used to write on the OMR Answer Sheet. Candidates should bring their own Ballpoint Pen. Use of pencil is strictly prohibited.
- The test will be of two hours duration from 11:30 a.m. to 01:30 p.m. and will have three Sections with only objective-type questions.
- Additional time of 40 minutes will be allowed for 'Divyang Students' (differently-abled students).
- A single Test Booklet comprising all the three Sections will be given to each candidate.
- There are 80 questions in all for 100 marks as per details below. 15 minutes additional time is allowed for reading the instructions from 11:15 a.m. to 11:30 a.m. :

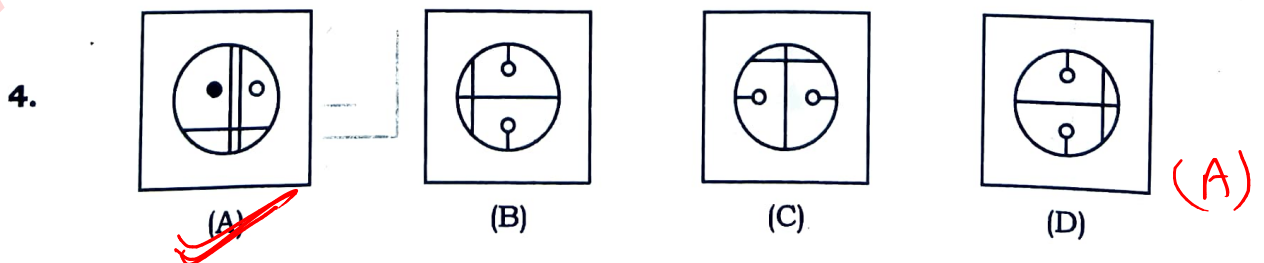
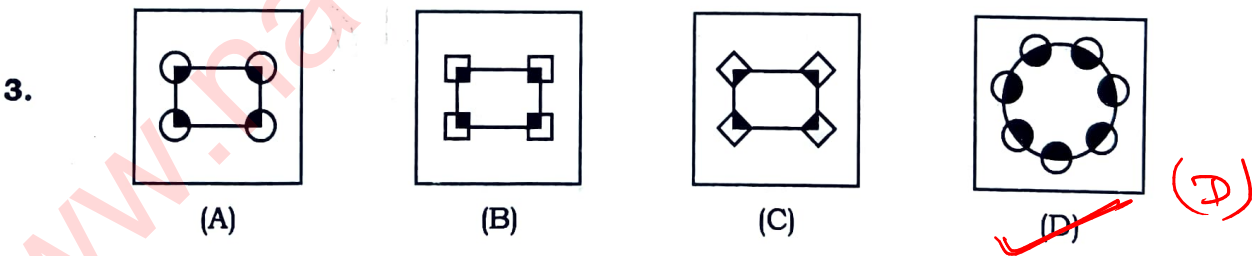
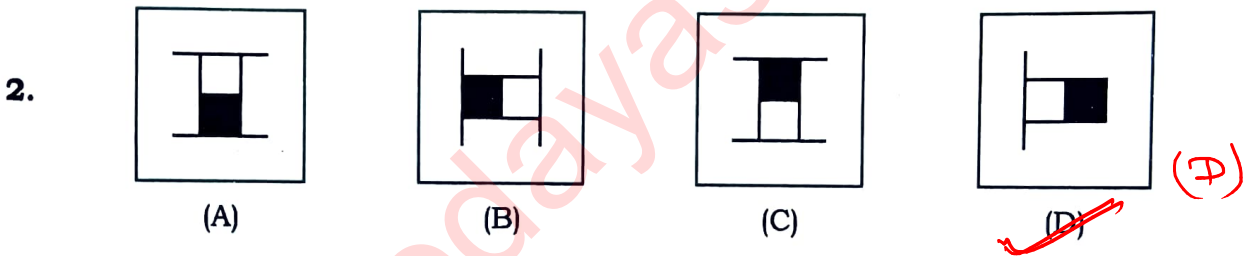
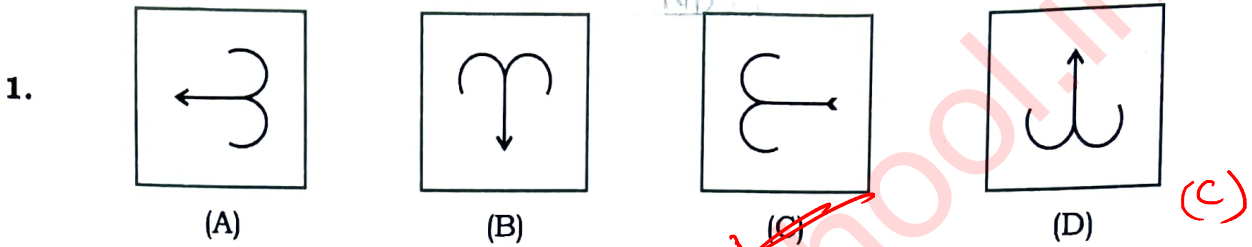
| Type of Tests | Sections | Number of Questions | Marks |
|---------------------|-------------|------------------------------|------------|
| Mental Ability Test | Section—I | From 1 to 40 = 40 Questions | 50 |
| Arithmetic Test | Section—II | From 41 to 60 = 20 Questions | 25 |
| Language Test | Section—III | From 61 to 80 = 20 Questions | 25 |
| Total | | 80 | 100 |

- All questions are to be attempted. Every question carries equal mark.
- You must attempt questions of each Section because you have to qualify in each Section separately.
- Section—I has ten Parts. Separate directions are given for each Part.
- Overwriting, striking, cutting, applying white/correction fluid and erasing on the OMR Answer Sheet is not allowed. Such answers will not be evaluated. Do not make any stray mark on the OMR Answer Sheet. No change in the darkened circle is allowed once marked in the OMR Answer Sheet.
- Rough work must not be done on the OMR Answer Sheet. Use Page Number 16 of the Test Booklet for rough work.
- A bell will be rung after every 30 minutes.
- No negative marking will be done.

SEAL

SECTION—I
MENTAL ABILITY TEST
PART—1

Directions : In Question Nos. 1 to 4, four figures (A), (B), (C) and (D) have been given in each question. Of these four figures, three figures are similar in some way and one figure is different. Select the figure which is different. Darken the circle for the answer in the OMR Answer Sheet against the number corresponding to the question.




PART—2

Directions : In Question Nos. 5 to 8, a question figure is given on the left side and four answer figures marked (A), (B), (C) and (D) are given on the right side. Select the answer figure which is exactly the same as the question figure and darken the circle in the OMR Answer Sheet against the number corresponding to the question.

Question Figure

Answer Figures

5.




(A)



(B)





~~(C)~~




(D)

(C)

6.




(A)



~~(B)~~



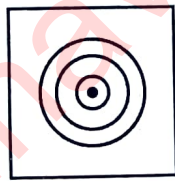
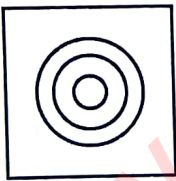
(C)



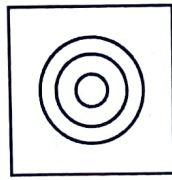
(D)

(B)

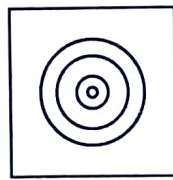
7.



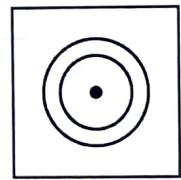
(A)



~~(B)~~





(C)




(D)

(B)

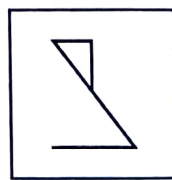
8.



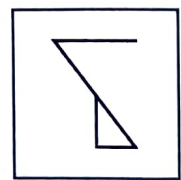
~~(A)~~



(B)



(C)



(D)



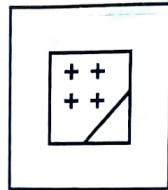
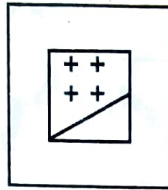
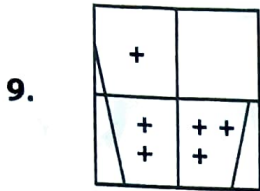
(A)

PART-3

Directions : In Question Nos. 9 to 12, there is a question figure on the left side, a part of which is missing. Observe the answer figures (A), (B), (C) and (D) on the right side and find out the answer figure which, **without changing the direction**, fits in the missing part of the question figure in order to complete the pattern in the question figure. Indicate your answer by darkening the circle in the OMR Answer Sheet against the number corresponding to the question.

Question Figure

Answer Figures



9.

(A)

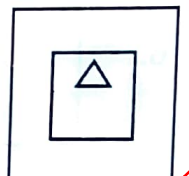
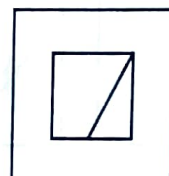
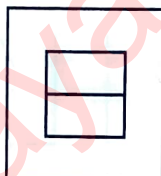
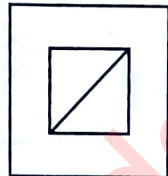
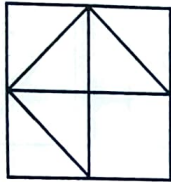
(B)

(C)

(D)

(C)

10.



(A)

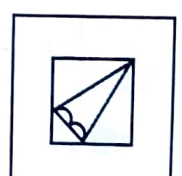
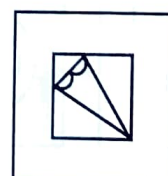
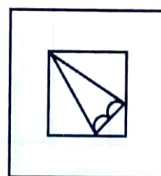
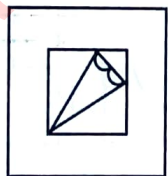
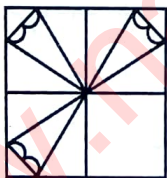
(B)

(C)

(D)

(A)

11.



(A)

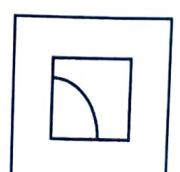
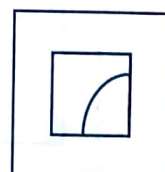
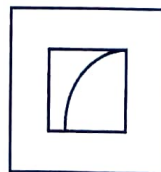
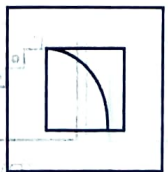
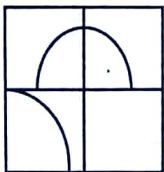
(B)

(C)

(D)

(B)

12.



(A)

(B)

(C)

(D)



(B)

PART-4

Directions : In Question Nos. 13 to 16, there are three question figures on the left side and the space for the fourth figure is left blank. The question figures are in a series. Find out one figure from among the answer figures given on the right side which occupies the blank space for the fourth figure on the left side and completes the series. Indicate your answer by darkening the circle in the OMR Answer Sheet against the number corresponding to the question.


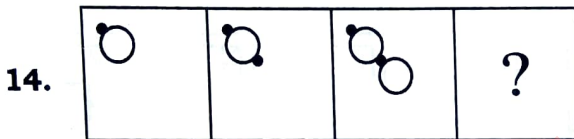
Question Figures

Answer Figures



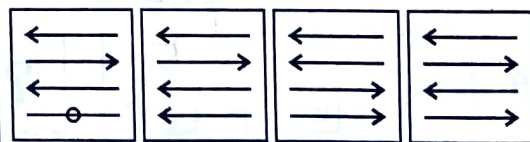
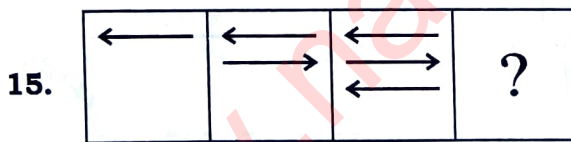
(A) (B) (C) (D)

(D)



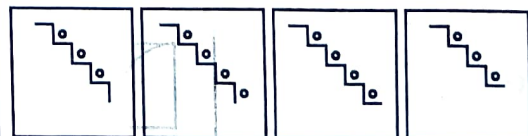
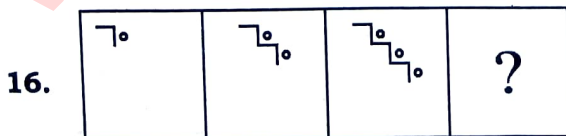
(A) (B) (C) (D)

(C)



(A) (B) (C) (D)

(D)



(A) (B) (C) (D)

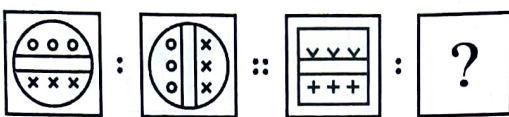
(B)


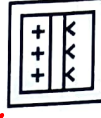


PART-5

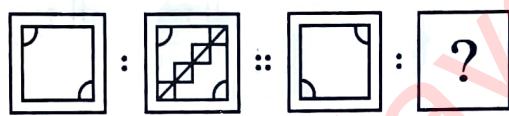
Directions : In Question Nos. 17 to 20, there are two sets of two question figures each. The second set has an interrogation mark (?). There exists a relationship between the first two question figures. Similar relationship should exist between the third and the fourth question figure. Select one of the answer figures which replaces the mark of interrogation. Darken the circle in the OMR Answer Sheet against the number corresponding to the question.

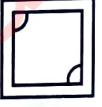
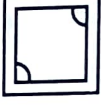
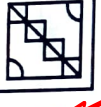
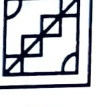
Question Figures

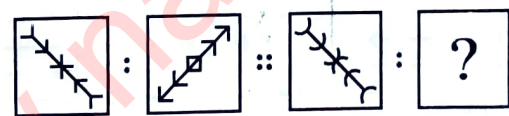
Answer Figures





17. 

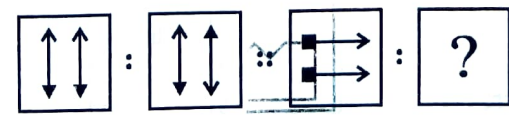
(A)  (B)  (C)  (D) 




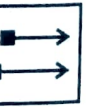
18. 

(A)  (B)  (C)  (D) 

19. 

(A)  (B)  (C)  (D) 

20. 

(A)  (B)  (C)  (D) 

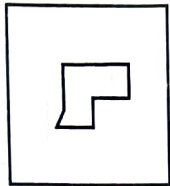
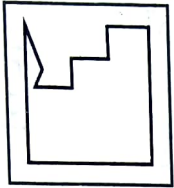
PART—6

Directions : In Question Nos. 21 to 24, one part of a geometrical figure (Triangle, Square, Circle) is on the left side as question figure and the other one is among the four answer figures (A), (B), (C) and (D) on the right side. Find the figure on the right side that completes the geometrical figure and darken the circle in the OMR Answer Sheet against the number corresponding to the question.

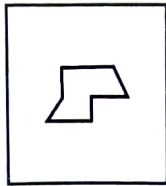
Question Figure

Answer Figures

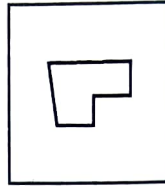
21.



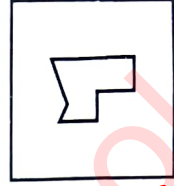
(A)



(B)



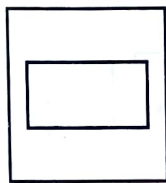

(C)



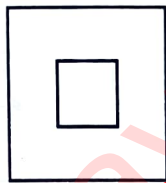
(D)

(D)

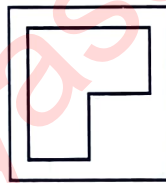
22.



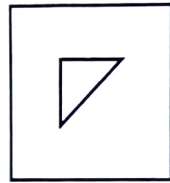
(A)



(B)




(C)




(D)

(B)

23.




(A)



(B)



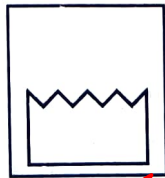
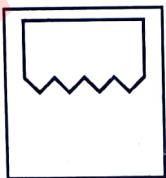
(C)



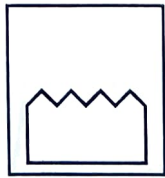
(D)

(B)

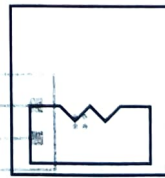
24.



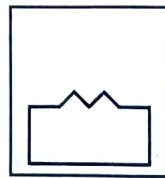
(A)



(B)



(C)



(D)

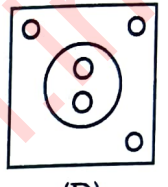

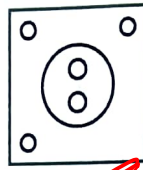
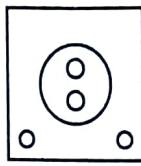
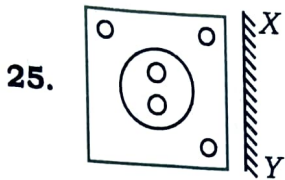
(A)

PART-7

Directions : In Question Nos. 25 to 28, there is a question figure on the left side and four answer figures marked (A), (B), (C) and (D) are given on the right side. Select the answer figure which is exactly the mirror image of the question figure when the mirror is held at XY. Indicate your answer by darkening the circle in the OMR Answer Sheet against the number corresponding to the question.

Question Figure

Answer Figures



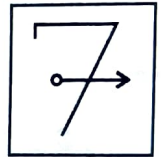
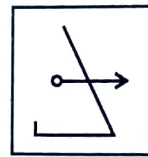
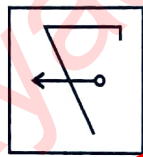
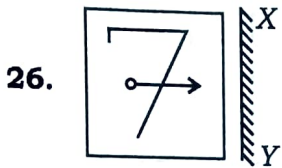
(A)

(B)

(C)

(D)

(B)



(A)

(B)

(C)

(D)

(B)








(A)

(B)

(C)

(D)

(B)



(A)

(B)

(C)

(D)

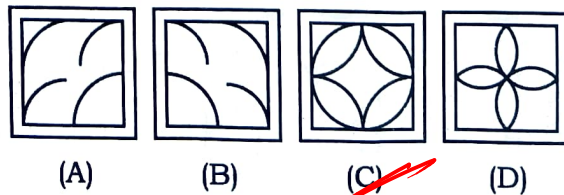
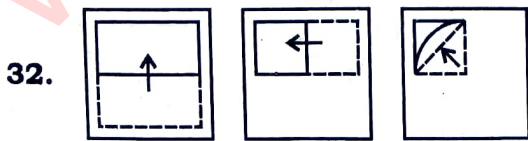
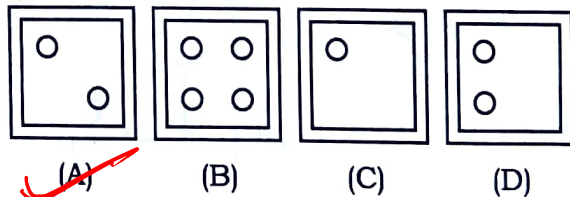

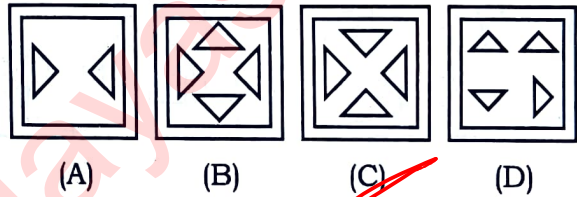
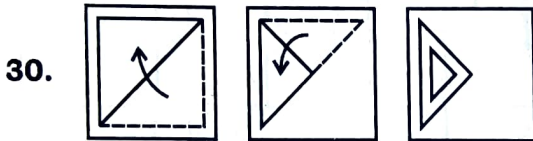
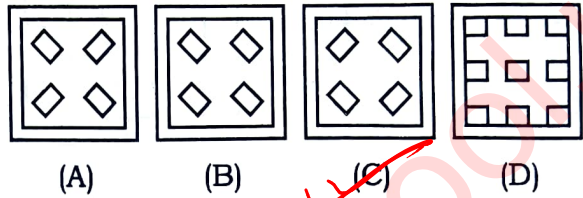
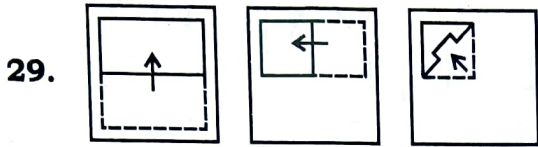
(C)

PART—8

Directions : In Question Nos. 29 to 32, a piece of paper is folded and punched as shown in the question figures on the left side, and four answer figures marked (A), (B), (C) and (D) are given on the right side. Select the answer figure which indicates how the paper will appear when opened (unfolded). Indicate your answer by darkening the circle in the OMR Answer Sheet against the number corresponding to the question.

Question Figures

Answer Figures




PART-9

Directions : In Question Nos. 33 to 36, a question figure is given on the left side and four answer figures marked (A), (B), (C) and (D) are given on the right side. Select the answer figure which can be formed from the cut-out pieces given in the question figure. Darken the circle in the OMR Answer Sheet against the number corresponding to the question.


Question Figure

Answer Figures


33.



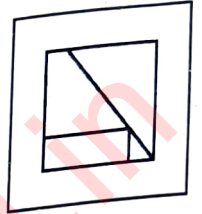
(A)



(B)

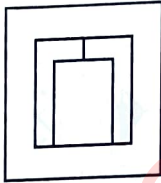
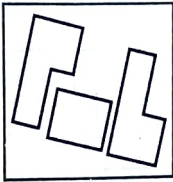


(C)

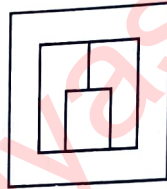


(D)


34.



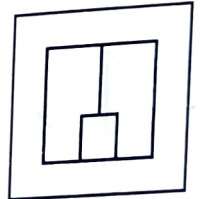
(A)



(B)

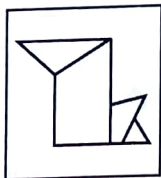



(C)

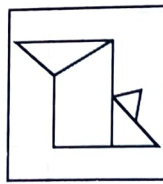


(D)

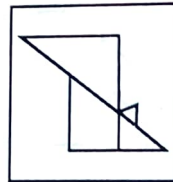
35.




(A)



(B)

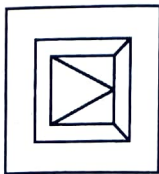



(C)

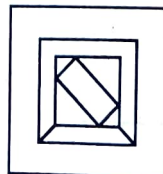


(D)


36.




(A)



(B)



(C)



(D)

(A)

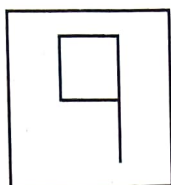

PART—10

Directions : In Question Nos. 37 to 40, a question figure is given on the left side and four answer figures marked (A), (B), (C) and (D) are given on the right side. Select the answer figure in which the question figure is hidden/embedded. Darken the circle in the OMR Answer Sheet against the number corresponding to the question.

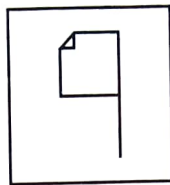
Question Figure

Answer Figures


37.




(A)



(B)




(C)




(D)

(D)


38.



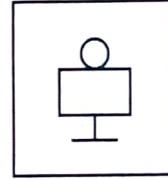
(A)



(B)





(C)



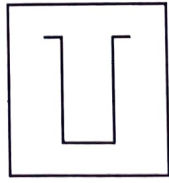
(D)

(A)


39.



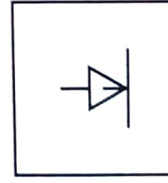
(A)



(B)



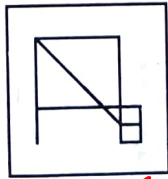
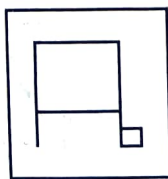
(C)



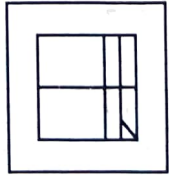
(D)

(B)

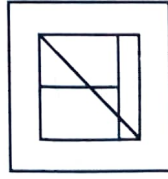
40.



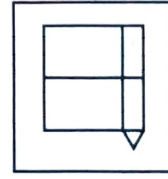
(A)



(B)



(C)



(D)

(A)

SECTION—II
ARITHMETIC TEST

Directions : For every question, **four** probable answers as (A), (B), (C) and (D) are given. Only **one** out of these is **correct**. Choose the correct answer and darken the circle in the OMR Answer Sheet against the number corresponding to the question.

41. A group of 80 students went on a picnic. 20% of the students are girls and rest are boys. How many girls should be added to make the boys as 70%?

- (A) 16 (B) 24
(C) 12 (D) 8

42. A 1250 m long train covers a distance of 1 km in 2 minutes. It crosses another stationary train in 4 minutes. The length of the stationary train is :

- (A) 1250 m (B) 500 m
(C) 750 m (D) 1000 m

43. Rahim got 10 marks more than Dinesh. George got 25 marks less than Rahim. The total marks of all the three are 235. The marks of George are :

- (A) 80 (B) 65
(C) 90 (D) 75

44. On simplification of

$$10 \times 10 + [400 \div \{100 - (50 - 3 \times 10)\}]$$

we get :

- (A) 265 (B) 65
(C) 310 (D) 105

45. 360 g is what percent of 3 kg?

- (A) 12% (B) 15%
(C) 18% (D) 21%

46. The difference between the cost price and the selling price of a commodity is ₹ 240. If the profit is 20%, then the selling price is :

- (A) ₹ 1,200 (B) ₹ 1,440
(C) ₹ 1,800 (D) ₹ 2,440

47. The length, width and height of a water tank are 11 m, 10 m and 9 m respectively. The tank is filled with water up to 6 m height. The empty portion of the water tank is :

- (A) $\frac{1}{4}$ (B) $\frac{1}{3}$
(C) $\frac{1}{6}$ (D) $\frac{2}{3}$

48. How many rectangular tiles of dimensions 10 cm × 8 cm are required to cover the floor of a hall having dimensions 12 m × 10 m?

- (A) 12000 (B) 15000
(C) 10000 (D) 18000

49. A dealer gets ₹ 56 less if instead of selling a chair at a gain of 15%, he sells it at a gain of 8%. The cost price of the chair is :

- (A) ₹ 700 (B) ₹ 800
(C) ₹ 900 (D) ₹ 950

50. A 1 km long goods train is running at a speed of 45 km/h. The time taken by this goods train to pass through a 2 km long tunnel is :

- (A) 1 minute (B) 2 minutes
(C) 3 minutes (D) 4 minutes

SPACE FOR ROUGH WORK

Handwritten calculations for rough work:

- $80 \rightarrow 100\%$
 $\frac{20}{80}$
- $\frac{10}{100} \times \frac{20}{20} = \frac{20}{25} = \frac{1000}{25} = 40$
- $\frac{50}{43}$
- $6) 75$
 $\underline{-6}$
 15
 $\underline{-12}$
 3
- $\frac{90}{2}$
- $\frac{45}{6}$
- $\frac{18}{120}$
- $\frac{36}{9}$
- $12000 \times 1000 \text{ m}$
- 12000×8
 $\underline{15000}$
 120000
- 18×240
 $\underline{36}$
 6120
- 30000
- 125

51. Five thousand five hundred fifty-five is written as :

- (A) 5055 (B) 5505
(C) 5550 (D) 5555 (D)

52. The difference between the greatest and smallest 4-digit numbers using all the digits 9, 7, 0 and 4 is :

- (A) 8991 (B) 5391
(C) 9261 (D) 5661 (D)

53. The sum of two numbers is 8 and their product is 15. What is the sum of their reciprocals?

- (A) $\frac{8}{15}$ (B) $\frac{15}{8}$ (C) 23 (D) 7
- $a+b=8$
 $a \cdot b=15$
 $\frac{15}{8} + \frac{15}{8} = \frac{15 \cdot 2}{8}$

54. The HCF of $2^2 \times 3^3 \times 5^5$, $2^3 \times 3^2 \times 5^2 \times 7$ and $2^4 \times 3^4 \times 5 \times 7^2 \times 13$ is :

- (A) $2^2 \times 3^2 \times 5 \times 7 \times 13$
(B) $2^4 \times 3^4 \times 5^5$
(C) $2^4 \times 3^4 \times 5^2 \times 7 \times 11$
(D) $2^2 \times 3^2 \times 5$ (D)

55. If 15 is the sum of three consecutive numbers, then the square of the middle number is :

- (A) 16 (B) 25 (C) 36 (D) 49

56. A number with 4 or more digits is divisible by 8, if the :

- (A) number is even
(B) last digit is divisible by 8
(C) last two digits are divisible by 8
(D) last three digits are divisible by 8 (D)

57. 5 cm is expressed in kilometres as :

- (A) 0.005 km
(B) 0.0005 km
(C) 0.00005 km (C)
(D) 0.000005 km

58. Which of the following numbers is divisible by 3, 4, 5 and 6?

- (A) 36 (B) 60 (C) 80 (D) 90

59. On dividing 4.239 by 0.9, we get :

- (A) 0.471 (B) 4.71 (C) 47.1 (D) 471 (B)

60. My watch shows 7:05 a.m. It is 25 minutes fast. The correct time is :

- (A) 7:30 a.m.
(B) 7:50 a.m.
(C) 6:40 a.m. (C)
(D) 5:40 a.m.

SPACE FOR ROUGH WORK

$3+4+5 = 678$

$\frac{3}{45} = \frac{1}{15}$

$\frac{1}{15} \times 60$

$2^2 \times 3^3 \times 5^5$
 $2^3 \times 3^2 \times 5^2 \times 7$
 $2^4 \times 3^4 \times 5 \times 7^2 \times 13$

7:00

SECTION—III
LANGUAGE TEST

Directions : There are **four** passages in this Section. Each passage is followed by **five** questions. Read each passage carefully and answer the questions that follow. For each question, **four** probable answers as (A), (B), (C) and (D) are given. Only **one** out of these is **correct**. Choose the correct answer and darken the circle in the OMR Answer Sheet against the number corresponding to the question.

PASSAGE—1

We cannot judge a person merely through his outward appearance. Appearances are often deceptive. It is difficult to know one's virtues or qualities at a glance. Sometimes we are drawn towards a person by his outward appearance. But later we realise that we judged him wrong. Many things appear attractive superficially. But very often things are not what they seem to be. We should find out the true nature of a person or a thing.

61. Outward appearances are often _____.

- (A) ~~(A)~~ deceptive (B) strong
(C) clear (D) true

62. What is difficult to know at a glance?

- (A) One's name
(B) One's address
(C) ~~(C)~~ One's virtues
(D) One's ambition

63. Mostly we are attracted towards a person by his/her _____.

- (A) inner show
(B) attractive personality
(C) ~~(C)~~ outward appearance
(D) mental power

64. 'Attractive' is **not** the synonym of _____.

- (A) beautiful (B) pretty
(C) lovely (D) ~~(D)~~ ugly

65. 'Deceptive' is a/an _____.

- (A) Adverb (B) Verb
(C) ~~(C)~~ Adjective (D) Noun

PASSAGE—2

Lal Bahadur Shastri was the second Prime Minister of India. He is said to be one of the best leaders India has ever produced. But only a few people know about his early life. He battled against all odds in his life to complete his studies. After completing his studies, he did not opt for any job. He was eager to join the freedom movement. Soon he became a mass leader. He became the Prime Minister of India in 1964. He was a laborious person and worked at least eighteen hours a day.

66. Lal Bahadur Shastri was the _____ Prime Minister of India.

- (A) ~~(A)~~ second (B) first (A)
(C) third (D) fourth

67. He battled _____ all odds in his life.

- (A) for (B) ~~(B)~~ against (B)
(C) in (D) into

68. He became a _____ leader.

- (A) one man
(B) few men
(C) mob
(D) ~~(D)~~ mass (D)

69. 'Became' is the _____ tense of the verb.

- (A) present (B) ~~(B)~~ past (B)
(C) future (D) indefinite

70. 'Complete' is the synonym of _____.

- (A) begin (B) commence
(C) ~~(C)~~ finish (C)
(D) open

PASSAGE—3

A volcano is a burning mountain with a great hole running deep into the earth. The mouth of the opening is called the 'crater' of the volcano. Sometimes a volcano may remain quiet for centuries and then suddenly become active. This is called a 'volcanic eruption', and great clouds of ash, dust, gas and steam rise from the crater accompanied by a loud noise. After some time, hot molten rock, called lava, begins to flow down the mountain. This may continue for many days or weeks. Then the volcano will 'go to sleep' again, or remain 'dormant' for many years. Most volcanoes are found near the sea, leading to formation of islands.

71. What is **not** true about a volcano?

- (A) (A) It is like big forest fires.
(B) (B) It gives out ash, dust and lava.
(C) (C) It is found mostly near the sea.
(D) (D) It creates a great hole deep into the earth.

72. When a volcano erupts, it is said to be ____.

- (A) (A) dormant
(B) (B) sleeping
(C) (C) active
(D) (D) quiet

73. The lava that flows down the mountain is in ____ state.

- (A) (A) solid
(B) (B) liquid
(C) (C) vapour
(D) (D) gaseous

74. The antonym of 'quiet' here is ____.

- (A) (A) calm
(B) (B) serene
(C) (C) still
(D) (D) active

75. 'Accompanied', as used in the passage, means ____.

- (A) (A) along with
(B) (B) followed by
(C) (C) happened
(D) (D) continued

PASSAGE—4

Sometimes we get bored doing the same kind of job. It reduces our efficiency, so we should have some entertainment to refresh ourselves. Then we can resume our work with the same efficiency and enthusiasm. Tension or worries are the enemies of our health. Laughter is the best medicine to get rid of unwanted tension or worries. We can also visit parks, museums, sanctuaries, etc., to remove our tension. Physical exercise is also as important as playing games.

76. We get bored doing the ____ kind of job.

- (A) (A) different
(B) (B) separate
(C) (C) similar
(D) (D) apart

77. After some entertainment, we can ____ our work.

- (A) (A) end
(B) (B) finish
(C) (C) close
(D) (D) resume

78. Laughter helps us in getting rid of ____.

- (A) (A) hereditary diseases only
(B) (B) unwanted tension
(C) (C) unforeseeable problems only
(D) (D) viral diseases

79. 'Resume' means the same as ____.

- (A) (A) take back
(B) (B) start again
(C) (C) finish
(D) (D) discontinue

80. 'Efficiency' is the antonym of ____.

- (A) (A) edge
(B) (B) effectiveness
(C) (C) inefficiency
(D) (D) effusiveness

नमस्कार,

नवोदय विद्यार्थियों, अभिभावकों एवं कोचिंग संचालकों

जवाहर नवोदय प्रवेश परीक्षा **कक्षा - 6** की तैयारी हेतु हमारी टीम द्वारा **10 प्रैक्टिस मॉडल पेपर एवं गणित के 1200 अतिमहत्त्वपूर्ण प्रश्न (Topic Wise) हल सहित** बनाये गये हैं ये सभी प्रैक्टिस सेट्स **हिन्दी माध्यम (Hindi Medium)** और **अंग्रेजी माध्यम (English Medium)** में तैयार किये गये हैं

प्रैक्टिस मॉडल पेपर सेट - 1 (हिन्दी व अंग्रेजी माध्यम) की **Sample PDF** हमारी वेबसाइट www.navodayaschool.in से डाउनलोड कर सकते हो

अगर आपको प्रैक्टिस मॉडल पेपर सेट - 1 से सेट -10 तक के पेपर (हिन्दी व अंग्रेजी माध्यम) प्रिंटेड (हार्ड कॉपी) में चाहिए हो हमारी **हेल्पलाइन नंबर 8696 50 3800** पर कॉल करके पूरी जानकारी ले सकते हो

नोट:- प्रिंटेड हार्ड कॉपी आपके पते (Address) पर डाक द्वारा स्पीड पोस्ट के माध्यम से भेजी जाएगी

ध्यान दें :- सभी प्रैक्टिस मॉडल पेपर के साथ **Original OMR (FREE)** दी जाएगी (ऑफर सीमित समय के लिए)

विशेष:-

1. स्कूल एवं कोचिंग सेंटर अगर सभी मॉडल पेपर Collaboration में अपना नाम एवं वाटरमार्क के साथ भी ले सकते हैं
2. ये सभी मॉडल पेपर हमारी टीम द्वारा पुरे भारत में भेजे जाते हैं
3. ये सभी मॉडल पेपर नवोदय विद्यालय की तैयारी करवाने वाले अनुभवी अध्यापकों द्वारा तैयार किये गये हैं
3. हमारी टीम द्वारा बनाये गये गणित के 1200 अतिमहत्त्वपूर्ण प्रश्न (Topic Wise) हल सहित प्रश्न सेट विगत वर्षों में नवोदय में चयन के लिए रामबाण साबित हुए हैं

अधिक जानकारी के लिए हमारी वेबसाइट www.navodayaschool.in पर विजिट कीजिये या **8696 50 3800 पर कॉल कीजिये**

Download Question
Paper Join -
[telegram.me/navodayaschool](https://t.me/navodayaschool)

Join Navodaya Vidyalaya Whatsapp Group



Join Whats APP Group

Click Here for Join

Join Navodaya Vidyalaya Telegram Channel



Join Telegram Channel

Click Here for Join

Join Navodaya Vidyalaya Website



Go To Website

Click Here for Go to Website

Join Navodaya Vidyalaya Youtube Channel



ePariksha Navodaya Classes

SUBSCRIBE



Click Here

Download ePariksha APP





Download ePariksha APP

Click Here for Join

नवोदय परीक्षा के लिए Maths (गणित) की 2000 Questions वाली रामबाण पुस्तक

आपकी तैयारी को बेहतर करके नवोदय विद्यालय में Selection दिलाने वाली Maths (गणित) की 2000 Questions वाली पुस्तक जो आपके नवोदय प्रवेश परीक्षा कक्षा - 6 में रामबाण साबित होने वाली है. आज ही Order कीजिये नवोदय परीक्षा के लिए Maths (गणित) की रामबाण पुस्तक.

Navodaya Class 6 Maths Book Order करने के लिए अभी Call या Whatsapp करें - 8696503800 (ePariksha India)



हमारे Social Media से जुड़ने के लिए ऊपर दिए गये Link पर Click करें. (For Join with us at Social Media click above links.)

Welcome to navodayaschool.in, यहाँ आपको [Navodaya Entrance Exam](#) से सम्बंधित सभी News, Study Notes, Daily Practice Quiz, Free Practice PDF मिलेगी.

Navodaya & School Entrance Exam से सम्बंधित Latest News, Practice Papers, Daily Free Quiz, Previous Papers PDF प्राप्त करने के लिए [8696503800](tel:8696503800) पर [WhatsApp Message](#) कीजिये.

[" NavodayaSchool.in "](http://NavodayaSchool.in)

For Daily Updates & Free PDF Notes & EBook Join Us -

| Important Links - | |
|--------------------------------------|---|
| WhatsApp Group | https://bit.ly/NavodayaStudyGroup |
| Telegram Channel | http://bit.ly/NavodayaTelegramChannel |
| Navodaya School Website | https://navodayaschool.in/ |
| ePariksha Navodaya APP | https://bit.ly/eParikshaAPP |
| Navdaya School Youtube Channel | https://bit.ly/eParikshaNavodayaYoutubeChannel |
| Navodaya School Study telegram Group | http://bit.ly/NavodayaTelegramGroup |

Thank You for studying with us..... Keep learning

----- Must Join This Community -----

Navodaya Preparation Student Community -

<http://bit.ly/NavodayaTelegramGroup>



Navodaya Entrance Exam **Class - 6**

नवोदय प्रवेश परीक्षा की तैयारी के लिए निःशुल्क पाठ्यसामग्री और ऑनलाइन टेस्ट तथा साथ ही विगत परीक्षाओं के हल प्रश्न-पत्र प्राप्त करने के लिए निचे दी गई नवोदय विद्यालय की वेबसाइट विजिट कीजिए



www.navodayaschool.in

Navodaya Study Materials Available

Edited By : www.navodayaschool.in

Navodaya Online Class / Navodaya OMR Sheet / Model Practice Sets / 1200 Maths Questions

Call us @ 8696 50 3800



जवाहर नवोदय प्रवेश परीक्षा

घर बैठे नवोदय तैयारी का शानदार मौका...

Class - 6

सम्पूर्ण भारत का सबसे सस्ता

नवोदय प्रवेश परीक्षा ऑनलाइन विडियो कोर्स

मात्र 499/-

विशेष डिस्काउंट (छूट) और कोर्स की

सम्पूर्ण जानकारी के लिए कॉल कीजिए - **8696 50 3800**

नोट:- कुछ समय बाद कोर्स **999/-** का हो जाएगा... आज की प्रवेश लें।



जवाहर नवोदय प्रवेश परीक्षा

नवोदय सफलता बैच विडियो कोर्स

Class - 6

आज ही जॉइन कीजिए

ये मौका दोबारा नहीं मिलेगा...

चूक मत जाना...आज ही प्रवेश लेना

Course in (Hindi & English Medium)

जिसमें आपको मिलेगा

e-Pariksha
Apka Apna App

Download
Navodaya Exam
Full Course App

Click Here

Navodaya Exam 2021
Class - 6

Numeric Ability

Recorded
Video Classes
with PDF Notes

Navodaya Entrance Exam
Class - 6

Full Mock Test

20 Sets
with Solution

हिन्दी माध्यम

Navodaya Exam 2021
Class - 6

Navodaya Previous Solved Paper

2015 to 2021
with Solution

Navodaya Entrance Exam
Class - 6

Numeric Ability


2000 MCQ eBooks
with Solution

हिन्दी माध्यम

सम्पूर्ण जानकारी के लिए कॉल कीजिए - **8696 50 3800**



जवाहर नवोदय प्रवेश परीक्षा



नवोदय विद्यालय समिति द्वारा जारी

नई ओ.एम.आर. शीट (OMR Sheet)

ऑरिजिनल प्रिंटेड (Printed)

के साथ

30 नवोदय प्रैक्टिस सेट्स

(Printed) में उपलब्ध

घर बैठे प्राप्त करने के लिए

अभी कॉल करें

हिन्दी माध्यम - 30 सेट्स
Jawahar Navodaya Entrance Exam Class - 6 (2022)
TEST BOOKLET
JZENG
ENGLISH

English Medium - 30 Sets
JZENG
ENGLISH

Roll Number: _____
Name of the Candidate: _____
Signature of the Candidate: _____
Time: 2 Hours

GENERAL INSTRUCTIONS FOR CANDIDATES

1. You are given a full booklet of 30 sets of test to practice...
2. You must read the instructions...
3. You must use the provided answer sheet...
4. You must use the provided answer sheet...
5. You must use the provided answer sheet...
6. You must use the provided answer sheet...
7. You must use the provided answer sheet...
8. You must use the provided answer sheet...
9. You must use the provided answer sheet...
10. You must use the provided answer sheet...

Call @ 8696 50 3800

जवाहर नवोदय प्रवेश परीक्षा

Printed Study Materials *for* Navodaya Coaching Centers

20 Set Full Model Paper (80 Questions Formate)

2000 Maths MCQ with Solution (Topic Wise)

2015 to 2021 Previous Paper with Solution

1000 Mental Ability MCQ (Topic Wise)

Language : (Passage/अनुच्छेद) 100 Sets

Original
OMR Sheet
Available

Content Available in
Hindi & English Medium

Call @ 8696 50 3800

कोचिंग संस्थानों के लिए प्रिंटेड मॉडल पेपर प्लान

30 मॉडल पेपर उपलब्ध (80 प्रश्न प्रारूप)

प्रत्येक प्रश्न-पत्र के साथ प्रिंटेड ओ.एम. आर. शीट

सभी पेपर्स कोचिंग के Logo & Brand Name
के साथ लेने की सुविधा

Click for Demo PDF 

अब बिना किसी झंझट के अपनी कोचिंग के नाम से प्रिंटेड स्टडी मटेरियल प्राप्त कीजिए

Call @ 8696503800

गूगल में ये नम्बर सर्च करो **कमाल** देखो नवोदय परीक्षा की सब जानकारी घर बैठे मिलेगी

FREE
Navodaya
Notes PDF

अब मेरा
भी चयन
नवोदय में
होगा



8696503800



Keyword difficulty: 72.30% (for google.com database) — View full report for this keyword

All Maps Videos Images News More Tools

About 449 results (0.28 seconds)

https://www.youtube.com > channel > videos

1. e Pariksha Navodaya Sainik School - YouTube

AS: 0 Visits: 0 Pages/Visit: 0 Avg. Visit: 0 Bounce rate: 0
Get domain authority, visits and engagement data with a free SEMrush account - [Connect](#)
L: 0 LD: 31.8B I: 416M Rank: 2 whois </> source Rank: 2 Adv Disp Ads: 1
Pub Disp Ads: 1

Navodaya OMR Sheet घर बैठे प्राप्त हो रही है / आप भी आज ही आर्डर कीजिये Call @ 8696503800. 197 views 2 months ago.

https://www.youtube.com > watch

1 / Different Figure / भिन्न आकृति Call @ 8696503800 - YouTube



Navodaya Mental Ability Self Test - 1 / Different Figure / भिन्न आकृति Call @ 8696503800. 209 views 209 views. Mar 24, 2022.

YouTube - e Pariksha Navodaya Sainik School · 1 month ago